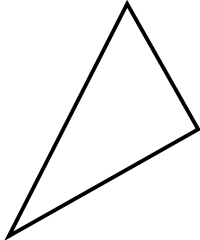
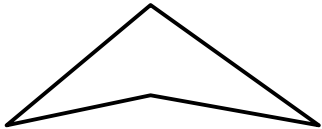

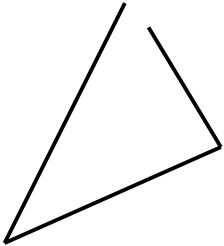
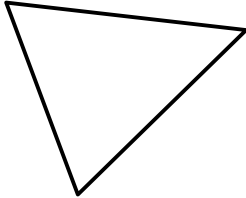
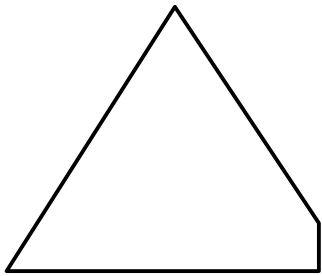
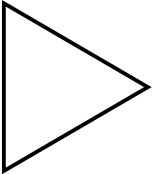
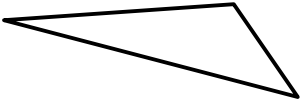

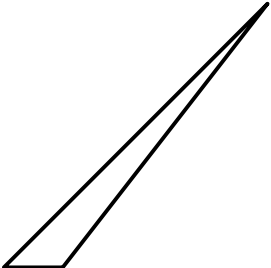
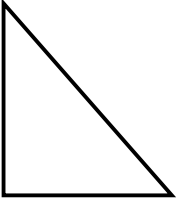
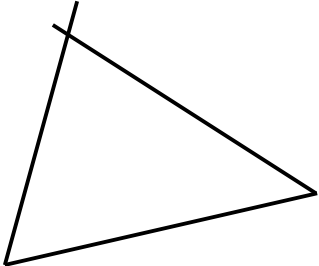



Directions: Look at each figure in the boxes; decide if it is a triangle or not a triangle. **Circle** your answer in the box, and **explain** your thinking for each figure.

<p>Figure A</p> <p style="text-align: center;">Triangle Not a Triangle</p> <p>Explanation:</p> <div style="text-align: center;">  </div>	<p>Figure B</p> <p style="text-align: center;">Triangle Not a Triangle</p> <p>Explanation:</p> <div style="text-align: center;">  </div>
<p>Figure C</p> <p style="text-align: center;">Triangle Not a Triangle</p> <p>Explanation:</p> <div style="text-align: center;">  </div>	<p>Figure D</p> <p style="text-align: center;">Triangle Not a Triangle</p> <p>Explanation:</p> <div style="text-align: center;">  </div>
<p>Figure E</p> <p style="text-align: center;">Triangle Not a Triangle</p> <p>Explanation:</p> <div style="text-align: center;">  </div>	<p>Figure F</p> <p style="text-align: center;">Triangle Not a Triangle</p> <p>Explanation:</p> <div style="text-align: center;">  </div>

<p>Figure G</p> <p>Triangle Not a Triangle</p> <p>Explanation:</p> 	<p>Figure H</p> <p>Triangle Not a Triangle</p> <p>Explanation:</p> 
<p>Figure I</p> <p>Triangle Not a Triangle</p> <p>Explanation:</p> 	<p>Figure J</p> <p>Triangle Not a Triangle</p> <p>Explanation:</p> 
<p>Figure K</p> <p>Triangle Not a Triangle</p> <p>Explanation:</p> 	<p>Figure L</p> <p>Triangle Not a Triangle</p> <p>Explanation:</p> 
<p>Figure M</p> <p>Triangle Not a Triangle</p> <p>Explanation:</p> 	<p>Figure N</p> <p>Draw a triangle of your own in this box.</p>