

A

Name _____

Grade 4 - Benchmark 1
Constructed Response

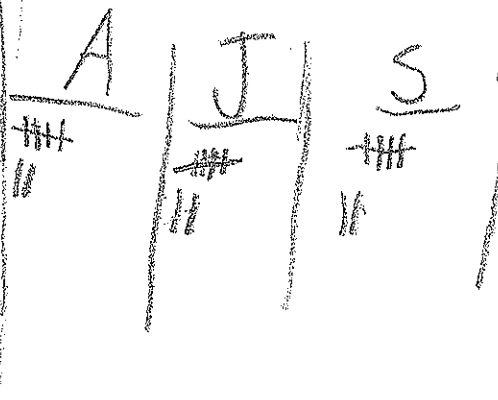

Solve the problem below. Show your work in the box.

Andre, James and Shawn each had 15 marbles. They put together their money to buy a \$3.00 bag of 21 marbles. If the boys divide the marbles equally, how many total marbles will each boy have?

Answer 22 marbles

Show your thinking with numbers, pictures or words.

$$\begin{array}{r} A \quad J \quad S \\ \hline + 15 \quad 15 \quad 15 \\ + 7 \quad + 7 \quad + 7 \\ \hline 22 \quad 22 \quad 22 \end{array}$$



Nam _____

Grade 4 - Benchmark 1
Constructed Response

Solve the problem below. Show your work in the box.

Andre, James and Shawn each had 15 marbles. They put together their money to buy a \$3.00 bag of 21 marbles. If the boys divide the marbles equally, how many total marbles will each boy have?

Answer 22 marbles


Show your thinking with numbers, pictures or words.

Handwritten work in the box:

0 0
* 15 15
15 15 15

$$\begin{array}{r} 15 \\ 15 \\ 15 \\ \hline 45 \\ + 21 \\ \hline 66 \end{array}$$

$66 \div 3 = 22$



I added $15 + 15 + 15$ and it = 45 then I added $45 + 21$ it = 66 then I $\div 66$ and 3 and it = 22.



Name: _____


Grade 4 - Benchmark 1
Constructed Response

Solve the problem below. Show your work in the box.


Andre, James, and Shawn each had 15 marbles. They put together their money to buy a \$3.00 bag of 21 marbles. If the boys divide the marbles equally, how many total marbles will each boy have?

Answer: 36 marbles

Show your thinking with numbers, pictures, or words.



now theirs 21 000




00

$$\begin{array}{r} 21 \\ + 15 \\ \hline 36 \end{array}$$

Shawn could have 10 marbles.

andre could have 10 marbles. and James could have 10 so it would be fair an then the other 6 are the extra marbles



Name _____

Grade 4 - Benchmark 1
Constructed Response

Solve the problem below. Show your work in the box.

Andre, James and Shawn each had 15 marbles. They put together their money to buy a \$3.00 bag of 21 marbles. If the boys divide the marbles equally, how many total marbles will each boy have?

Answer each boy will have 22 marbles

Show your thinking with numbers, pictures or words.

Andre	James	Shawn
00000 00000 00000 + 00000 + 00 = 22	00000 00000 00000 + 00000 + 00 = 22	00000 00000 00000 + 00000 + 00 = 22

(E)

Name: _____

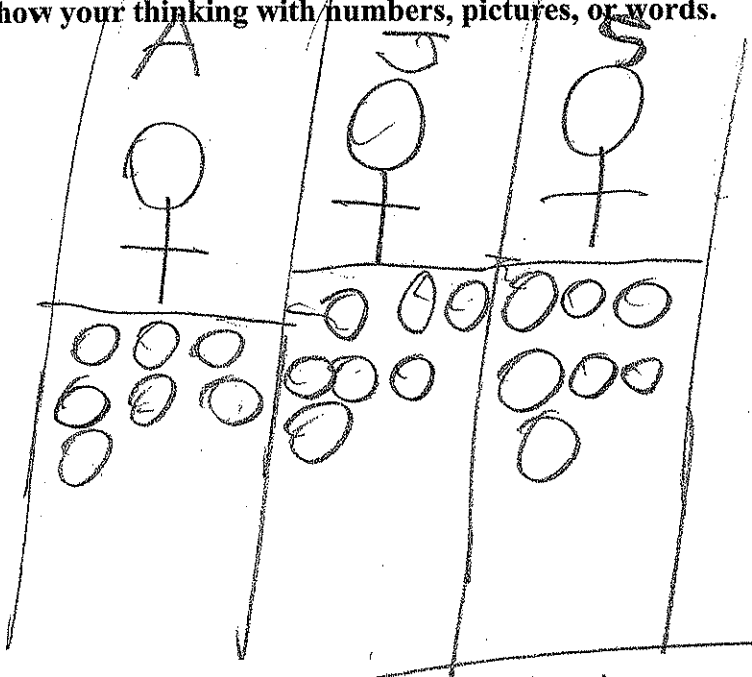
Grade 4 - Benchmark 1
Constructed Response

Solve the problem below. Show your work in the box.

Andre, James, and Shawn each had 15 marbles. They put together their money to buy a \$3.00 bag of 21 marbles. If the boys divide the marbles equally, how many total marbles will each boy have?

Answer: 7 marbles

Show your thinking with numbers, pictures, or words.



$$\begin{array}{r}
 \overline{07} \\
 3 \overline{) 21} \\
 \underline{- 21} \\
 00
 \end{array}$$

I drew 21 (marbles) and crossed out one and one goes to one of the kids until all were gone then I counted how much each got