

Making 124

Lamar, Siri, and Junior were using base-ten blocks to learn about numbers.

Lamar said, "I can make 124 using 1 hundred, 2 tens, and 4 ones."


Siri said, "I can make 124 using 124 ones."

Junior said, "I can make 124 using only tens and ones."

In what way could Junior do this?

Answer: 10 tens 24 ones

Show how Junior's thinking was correct. Use words, numbers, or pictures to support your answer.



Junior could put 10 tens
and put 24 ones

OR... can do 5 tens and 74 ones

A hand-drawn diagram showing 5 vertical lines representing tens blocks and 74 small dots arranged in two rows of 37, representing ones blocks.

$50 + 74 = 124$

8

Making 124

Lamar, Siri, and Junior were using base-ten blocks to learn about numbers.

Lamar said, "I can make 124 using 1 hundred, 2 tens, and 4 ones."


Siri said, "I can make 124 using 124 ones."

Junior said, "I can make 124 using only tens and ones."

In what way could Junior do this?

Answer: 12 tens 4 ones

Show how Junior's thinking was correct. Use words, numbers, or pictures to support your answer.



Making 124

Lamar, Siri, and Junior were using base-ten blocks to learn about numbers.

Lamar said, "I can make 124 using 1 hundred, 2 tens, and 4 ones."

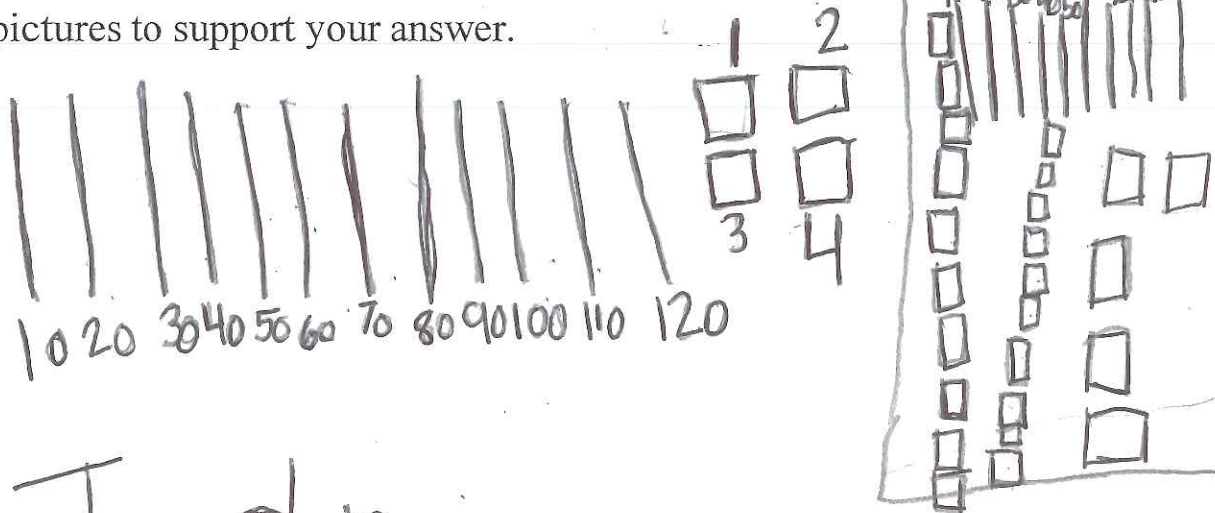
Siri said, "I can make 124 using 124 ones."

Junior said, "I can make 124 using only tens and ones."

In what way could Junior do this?

Answer: 12 tens 4 ones

Show how Junior's thinking was correct. Use words, numbers, or pictures to support your answer.



I drew one-hundred
and twenty four

120 Tens and four ones

Making 124

Lamar, Siri, and Junior were using base-ten blocks to learn about numbers.

Lamar said, "I can make 124 using 1 hundred, 2 tens, and 4 ones."


Siri said, "I can make 124 using 124 ones."

Junior said, "I can make 124 using only tens and ones."

In what way could Junior do this?

Answer: 12 tens 4 ones

Show how Junior's thinking was correct. Use words, numbers, or pictures to support your answer.



$100 + 24 = 124$
I know

Making 124

Lamar, Siri, and Junior were using base-ten blocks to learn about numbers.

Lamar said, "I can make 124 using 1 hundred, 2 tens, and 4 ones."

Siri said, "I can make 124 using 124 ones."

Junior said, "I can make 124 using only tens and ones."

In what way could Junior do this?

Answer: 12 tens 4 ones

Show how Junior's thinking was correct. Use words, numbers, or pictures to support your answer.



tens



ones

Making 124

Lamar, Siri, and Junior were using base-ten blocks to learn about numbers.

Lamar said, "I can make 124 using 1 hundred, 2 tens, and 4 ones."

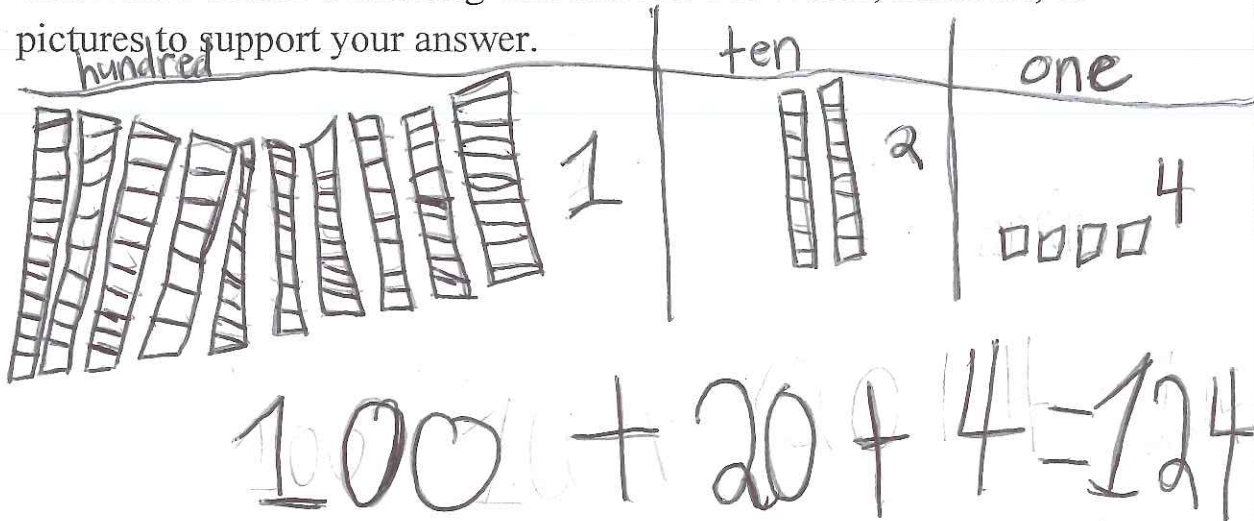
Siri said, "I can make 124 using 124 ones."

Junior said, "I can make 124 using only tens and ones."

In what way could Junior do this?

Answer: 12 tens 4 ones

Show how Junior's thinking was correct. Use words, numbers, or pictures to support your answer.



I know that ten tens is 100 so it's 1 hundred. So put 2 more ten it well be 120 and add 4 ones it well be 124.