

A

Name \_\_\_\_\_

Date \_\_\_\_\_

**Grade 2**  
**Constructed Response for Benchmark 1**  
**2010-2011**

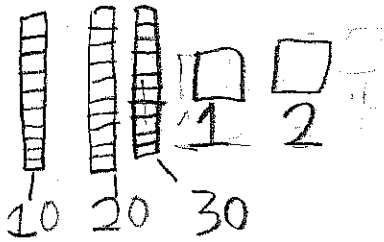
**What goes in the box?**

What number would you put in the box to make the following a true number sentence?

$$28 + 4 = \square + 5$$

Answer 32

Show how you solved this problem. Use pictures, numbers, and/or words.



I used tens and ones to figure out this problem.

Name \_\_\_\_\_

Date \_\_\_\_\_

Grade 2

Constructed Response for Benchmark 1

2010-2011

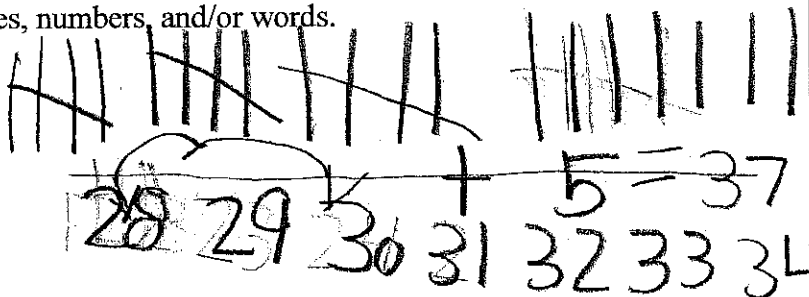

### What goes in the box?

What number would you put in the box to make the following a true number sentence?

$$28 + 4 = \boxed{\phantom{00}} + 5$$

Answer 37

Show how you solved this problem. Use pictures, numbers, and/or words.



$$28 + 4 + 5 = 37$$

$$38 - 1 = 37$$

C

Name \_\_\_\_\_

Date \_\_\_\_\_

**Grade 2**  
**Constructed Response for Benchmark 1**  
**2010-2011**


**What goes in the box?**

What number would you put in the box to make the following a true number sentence?

$$28 + 4 = \boxed{32} + 5$$

Answer 32

Show how you solved this problem. Use pictures, numbers, and/or words.



A handwritten number line with tick marks every 1 unit, labeled from 0 to 32. The numbers 28, 29, 30, 31, and 32 are written above their respective tick marks.

$$28 + 4 = 32$$

$$4 + 28 = 32$$

Name \_\_\_\_\_

Date \_\_\_\_\_

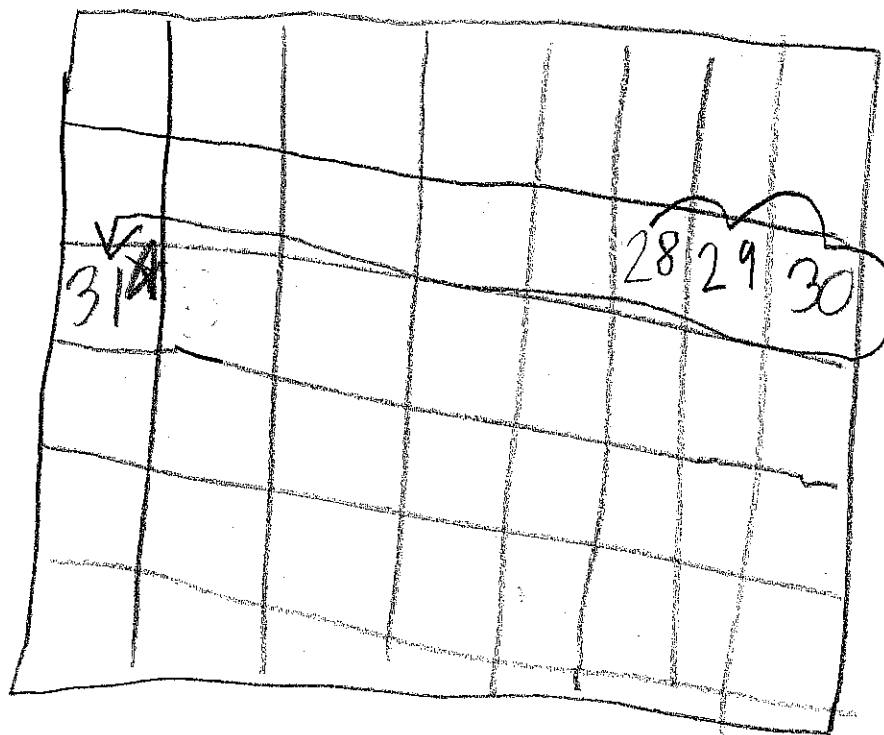
Grade 2

Constructed Response for Benchmark 1  
2010-2011**What goes in the box?**

What number would you put in the box to make the following a true number sentence?

Answer 31       $28 + 4 = \boxed{31} + 5$

Show how you solved this problem. Use pictures, numbers, and/or words.



Name \_\_\_\_\_

Date \_\_\_\_\_

**Grade 2**  
**Constructed Response for Benchmark 1**  
**2010-2011**


**What goes in the box?**

What number would you put in the box to make the following a true number sentence?

$$28 + 4 = \boxed{32} + 5$$

Answer 37

Show how you solved this problem. Use pictures, numbers, and/or words.



Name \_\_\_\_\_

Date \_\_\_\_\_

**Grade 2**  
**Constructed Response for Benchmark 1**  
**2010-2011**

**What goes in the box?**

What number would you put in the box to make the following a true number sentence?

Answer 4 ~~7~~   $28 + 4 = \boxed{32} + 5$

Show how you solved this problem. Use pictures, numbers, and/or words.

$$28 + 4 = 32 + 5 = 47$$

Number Grid ✓