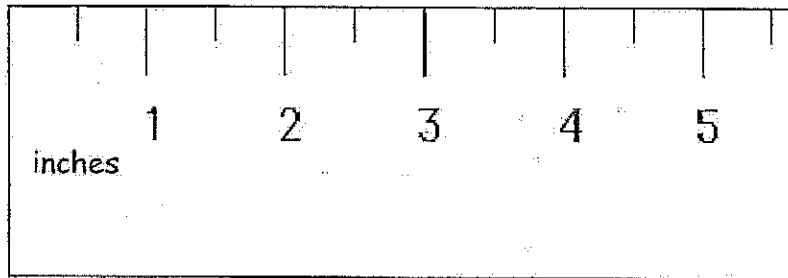


Name \_\_\_\_\_

Grade 3 – October 2010  
Constructed Response

Solve the problem below. Show your work in the box.

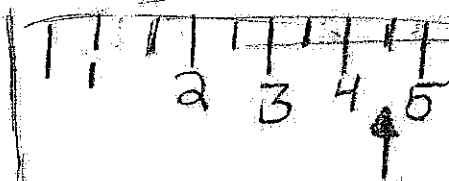



Maria needs your help to measure the length of her crayon. How long is Maria's crayon?

Answer about four inches

Tell how you solved this problem using pictures, numbers or words.

~~because it can't be five inches so it can be about four so it's not five.~~



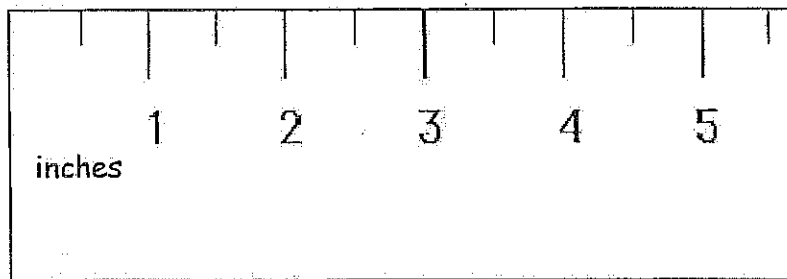
so it's not five  
but it's not four  
So it's probabley about  
four.

Name \_\_\_\_\_

B

Grade 3 – October 2010  
Constructed Response

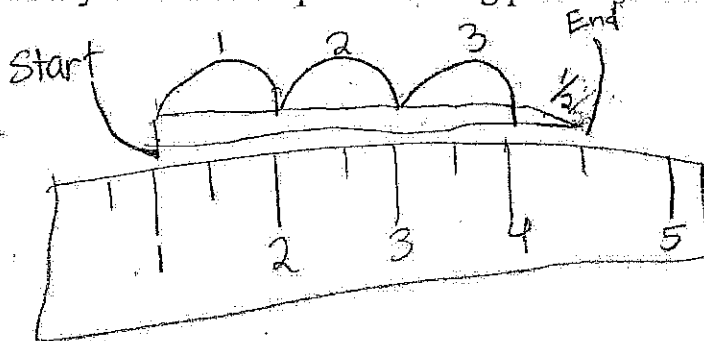
Solve the problem below. Show your work in the box.



Maria needs your help to measure the length of her crayon. How long is Maria's crayon?

Answer 3 1/2 inches

Tell how you solved this problem using pictures, numbers or words.



You had to start where the crayon was and end where

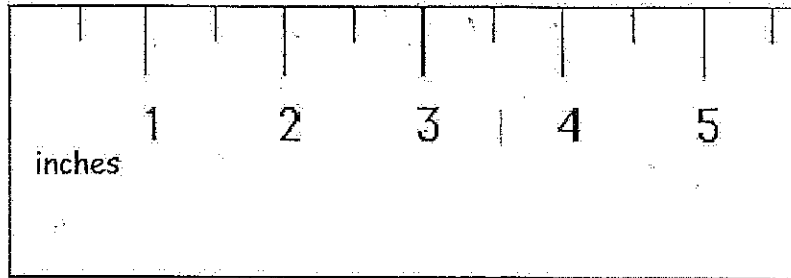
the end of the crayon.

C

Name \_\_\_\_\_

Grade 3 – October 2010  
Constructed Response

Solve the problem below. Show your work in the box.

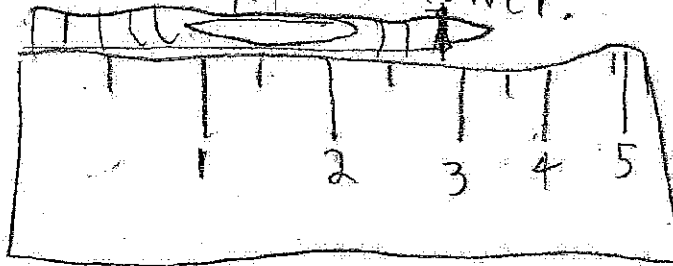


Maria needs your help to measure the length of her crayon. How long is Maria's crayon?

Answer 3 and a half inches

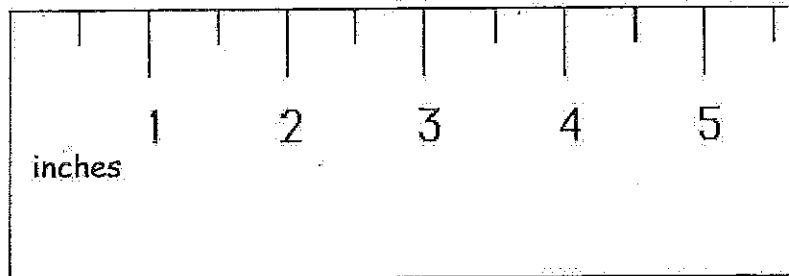
Tell how you solved this problem using pictures, numbers or words.

I know it is 3 and a half inches because if you put the crayon down to wear it starts and there you have your answer.



Grade 3 – October 2010  
Constructed Response

Solve the problem below. Show your work in the box.



Maria needs your help to measure the length of her crayon. How long is Maria's crayon?

Answer four and a half

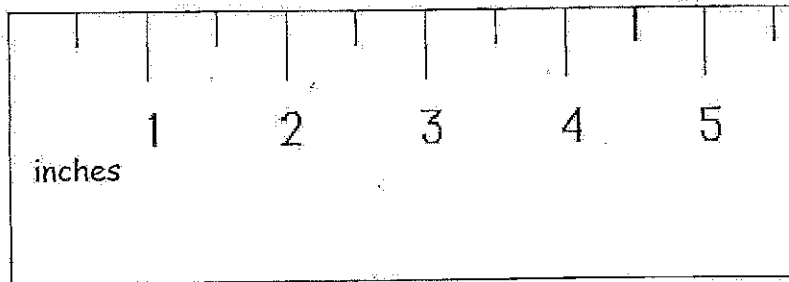
Tell how you solved this problem using pictures, numbers or words.

I measure the crayon  
and I got  $\frac{4}{1}$

Name \_\_\_\_\_

Grade 3 – October 2010  
Constructed Response

Solve the problem below. Show your work in the box.

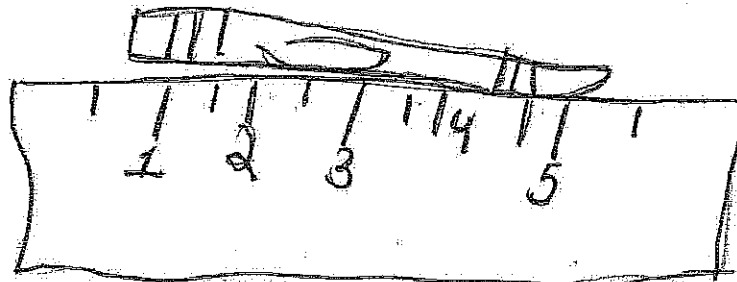


Maria needs your help to measure the length of her crayon. How long is Maria's crayon?

Answer There are three units in the crayon

Tell how you solved this problem using pictures, numbers or words.

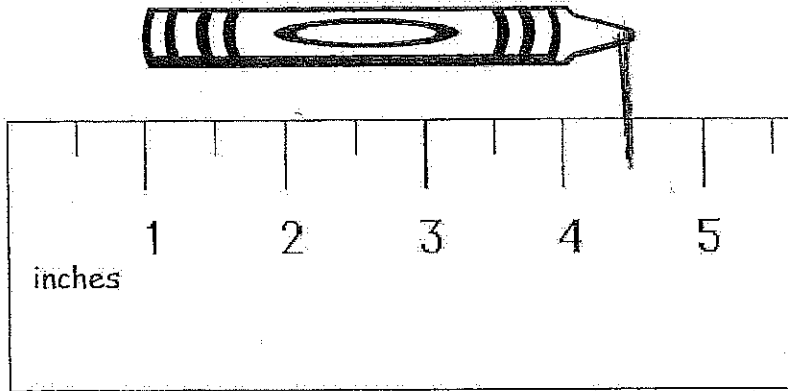
I figured it out by looking at the crayon and then look what number it is on. example



Name \_\_\_\_\_

Grade 3 – October 2010  
Constructed Response

Solve the problem below. Show your work in the box.



Maria needs your help to measure the length of her crayon. How long is Maria's crayon?

Answer 4-5

Tell how you solved this problem using pictures, numbers or words.

